

Fill the Bus



Objective: Add and subtract within 20 using the strategy of making a 10.

Number of Players: 2

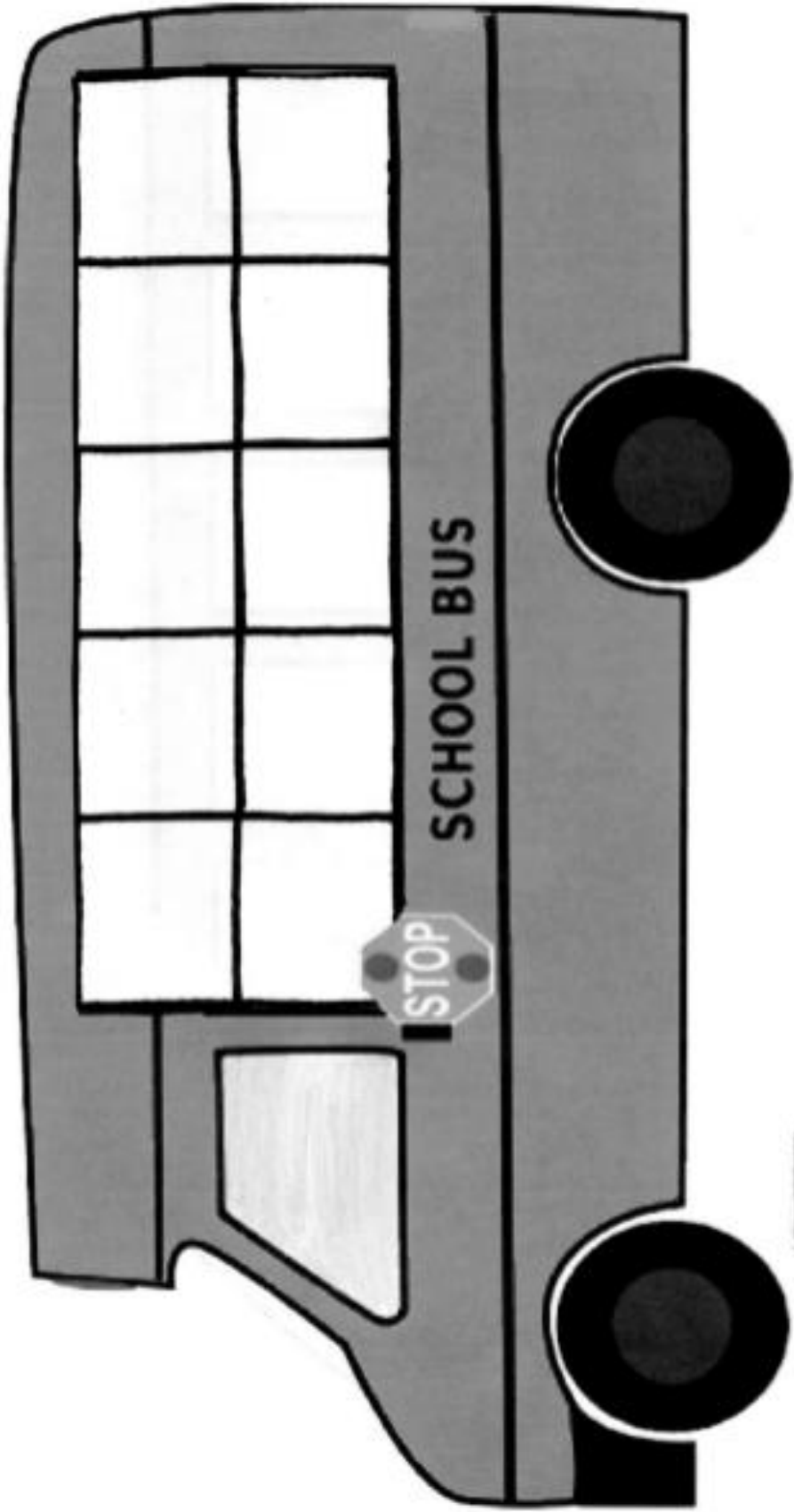
Materials for each pair of players: Bus stop board set of 20 two-color counters, deck of 0-9 number cards, and card with spinner labeled 7-9

Directions:

1. Player 1 spins a number and places that number of counters of the same color in the bus.
2. Player 2 then draws a number card and places that number of counters on the other color below the bus at the bus stop.
3. Players then slide counters from the bus stop into the bus to fill up all the extra "seats."
4. Players record the number sentence on the recording sheet.
5. Players then switch roles and continue play until the recording sheet is filled.

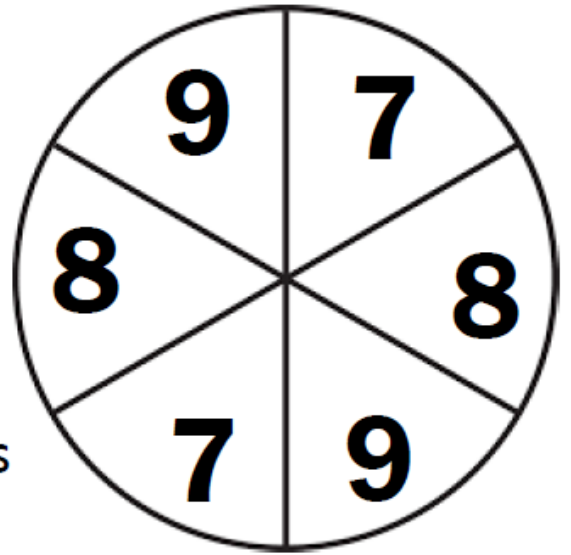
For easier play: (10 plus more)

1. Keep 10 counters in the bus for the entire game.
2. Player 1 chooses a number card 0-9 and places that number of counters at the bus stop below the bus.
3. Player 2 writes the matching number sentence on the recording sheet.
4. Players switch roles and continue play until the recording sheet is filled.



Fill the Bus

① There were _____
on the bus and _____
waiting in line.



② To make a 10, the addends
are _____ on the bus and
_____ seats filled and _____ more in line.

$$\underline{\quad\quad} + \underline{\quad\quad} + \underline{\quad\quad} = \underline{\quad\quad}$$


Fill the Bus

There were _____ on the bus and
_____ waiting in line.

The addends are _____ and _____.

$$\underline{\quad\quad} + \underline{\quad\quad} = \underline{\quad\quad}$$

Name _____




Fill the Bus

Recording Sheet

1. (+) + = _____
2. (+) + = _____
3. (+) + = _____
4. (+) + = _____
5. (+) + = _____

Name _____



Fill the Bus

Recording Sheet

1. (+) + = _____
2. (+) + = _____
3. (+) + = _____
4. (+) + = _____
5. (+) + = _____

Name _____



Fill the Bus

Recording Sheet

1. _____ + _____ + _____ = _____
2. _____ + _____ + _____ = _____
3. _____ + _____ + _____ = _____
4. _____ + _____ + _____ = _____
5. _____ + _____ + _____ = _____

Name _____




Fill the Bus

Recording Sheet

1. _____ + _____ + _____ = _____
2. _____ + _____ + _____ = _____
3. _____ + _____ + _____ = _____
4. _____ + _____ + _____ = _____
5. _____ + _____ + _____ = _____

Name _____



Fill the Bus

Recording Sheet

1. _____ + _____ + _____ = _____

2. _____ + _____ + _____ = _____

3. _____ + _____ + _____ = _____

4. _____ + _____ + _____ = _____

5. _____ + _____ + _____ = _____

6. _____ + _____ + _____ = _____

7. _____ + _____ + _____ = _____

8. _____ + _____ + _____ = _____

9. _____ + _____ + _____ = _____

10. _____ + _____ + _____ = _____

Name _____

Fill the Bus

Recording Sheet

1. $10 + \underline{\quad\quad} = \underline{\quad\quad}$

2. $10 + \underline{\quad\quad} = \underline{\quad\quad}$

3. $10 + \underline{\quad\quad} = \underline{\quad\quad}$

4. $10 + \underline{\quad\quad} = \underline{\quad\quad}$

5. $10 + \underline{\quad\quad} = \underline{\quad\quad}$

6. $10 + \underline{\quad\quad} = \underline{\quad\quad}$

7. $10 + \underline{\quad\quad} = \underline{\quad\quad}$

8. $10 + \underline{\quad\quad} = \underline{\quad\quad}$

9. $10 + \underline{\quad\quad} = \underline{\quad\quad}$

10. $10 + \underline{\quad\quad} = \underline{\quad\quad}$



Name _____

Fill the Bus

Recording Sheet

1. $10 + \underline{\quad\quad} = \underline{\quad\quad}$

2. $10 + \underline{\quad\quad} = \underline{\quad\quad}$

3. $10 + \underline{\quad\quad} = \underline{\quad\quad}$

4. $10 + \underline{\quad\quad} = \underline{\quad\quad}$

5. $10 + \underline{\quad\quad} = \underline{\quad\quad}$

6. $10 + \underline{\quad\quad} = \underline{\quad\quad}$

7. $10 + \underline{\quad\quad} = \underline{\quad\quad}$

8. $10 + \underline{\quad\quad} = \underline{\quad\quad}$

9. $10 + \underline{\quad\quad} = \underline{\quad\quad}$

10. $10 + \underline{\quad\quad} = \underline{\quad\quad}$

